

Examrace

NSTSE Class 3 Year 2019 Higher Questions and Answers Part 1

Glide to success with Doorsteptutor material for NSTSE : Get [full length tests using official NTA interface](#): all topics with exact weightage, real exam experience, detailed analytics, comparison and rankings, & questions with full solutions.

1. Add 278 to 195. The total amount is _____ more than 320.

- (A) 53
- (B) 63
- (C) 153
- (D) 363

2. The time shown on the clock is

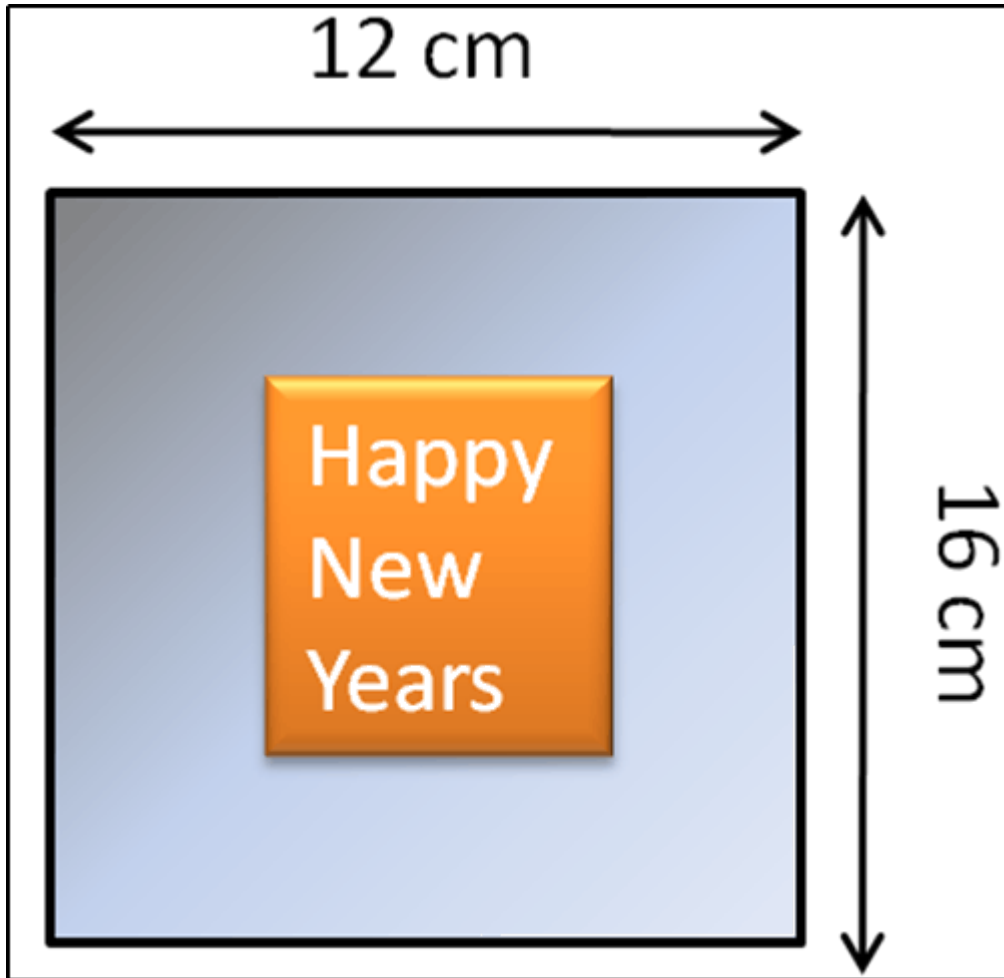


©Examrace. Report @violations @<https://tips.fbi.gov/>

- (A) 15 minutes to 2
- (B) 15 minutes past 1
- (C) 15 minutes to 3

(D) 15 minutes past 2

3. Tinku received a greeting card for the New Year. Find the total length of the sides of the card.



©Examrace. Report @violations @<https://tips.fbi.gov/>

(A) 16 cm

(B) 12 cm

(C) 28cm

(D) 56cm

4. If $7 \times \blacksquare = 35$, then find the value of $\blacksquare \times \blacksquare - \blacksquare = ?$

(A) 20

(B) 30

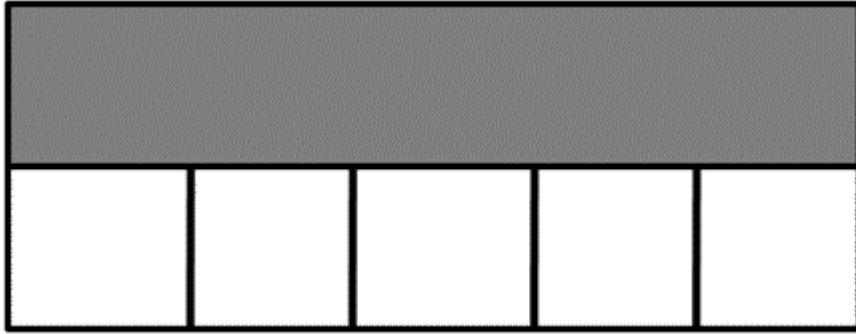
(C) 40

(D) 42

5. The number of children in a class is between 15 and 25. I can divide them into groups of 3 or groups of 4. (Without leaving out any child/children). Find the number of children in the class.

- (A) 28
- (B) 26
- (C) 24
- (D) 22

6. What fraction of the figure is not shaded?




©Examrace. Report ©violations @https://tips.fbi.gov/

- (A) $\frac{1}{6}$
- (B) $\frac{1}{2}$
- (C) $\frac{6}{10}$
- (D) $\frac{5}{6}$

7. The length of each rope above is in centimeters. Which rope is the longest?


(A)



©Examrace. Report ©violations @https://tips.fbi.gov/


(B)

Visit examrace.com for free study material, doorsteptutor.com for questions with detailed explanations, and "Examrace" YouTube channel for free videos lectures



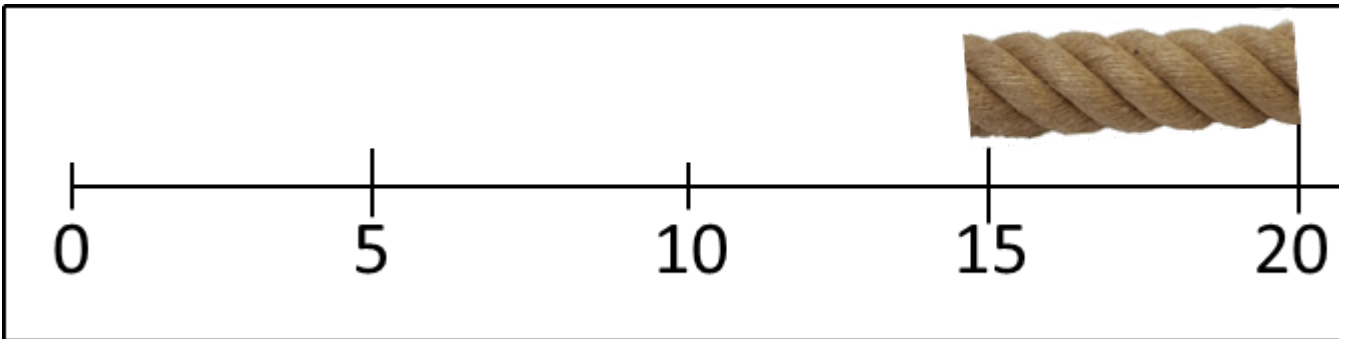
©Examrace. Report ©violations @<https://tips.fbi.gov/>

(C)



©Examrace. Report ©violations @<https://tips.fbi.gov/>

(D)



©Examrace. Report ©violations @<https://tips.fbi.gov/>


8. The mass of the cake is about ____kg ____ g.



[©Examrace. Report ©violations @https://tips.fbi.gov/](https://tips.fbi.gov/)

- (A) 2 kg 2 g
- (B) 2 kg 300 g
- (C) 2 kg 30g
- (D) 2 kg 3g

9. The capacity of _____ more water is needed to fill up the container to the 1400 ml mark.



[©Examrace. Report ©violations @https://tips.fbi.gov/](https://tips.fbi.gov/)

- (A) 600 ml
- (B) 800 ml
- (C) 700 ml
- (D) 500 ml