




NSTSE Class 3 Year 2019 Higher Questions and Answers Part 2

Glide to success with Doorsteptutor material for NSTSE Class-2: **fully solved questions with step-by-step explanation**- practice your way to success.


10. If



stand for 12 leaves,



stand for 18 leaves then



stand for _____ leaves.

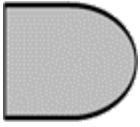
- (A) 6
- (B) 8
- (C) 15
- (D) 30

11. Apples were priced Rs. 18 for 2. If Asha buys 5 apples, how much should she pay?

- (A) Rs. 45
- (B) Rs. 36
- (C) Rs. 28

(D) Rs. 90

12. Which is the figure that can combined with

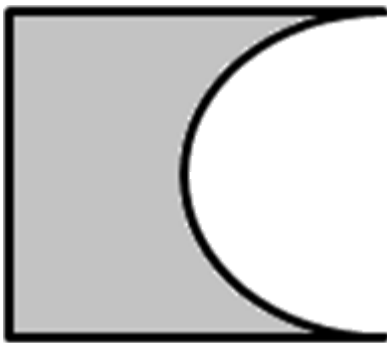


to give

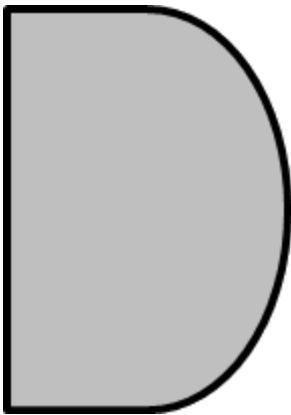


?


(A)



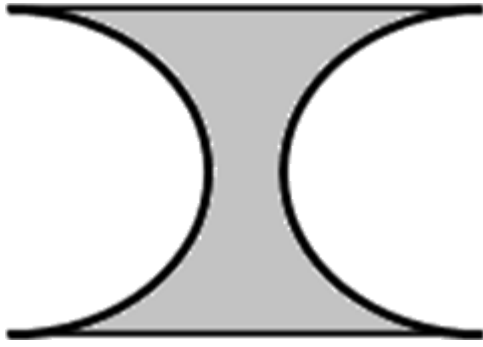
(B)



(C)



(D)



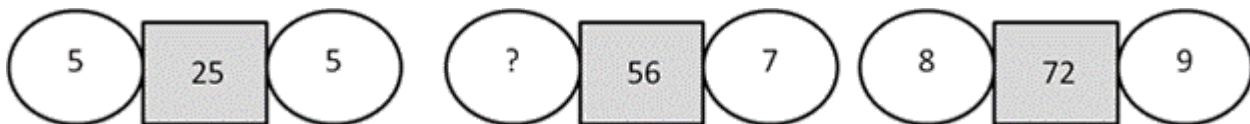
13. Nishi had 1364 pins. Anish had twice as many pins as Nishi. How many pins did they have altogether?

- (A) 2628
- (B) 2728
- (C) 3092
- (D) 4092

14. Subtract 6 hundreds 2 ones from 80 tens. The digit in the hundreds place is

- (A) 1
- (B) 2
- (C) 0
- (D) 5

15. What is the missing number?

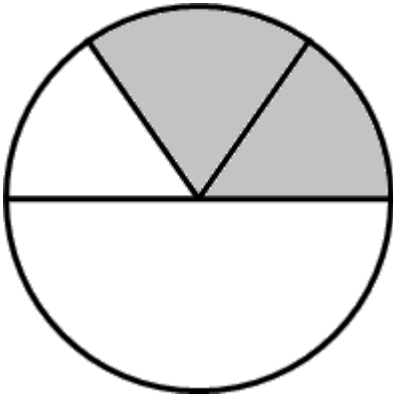


- (A) 5
- (B) 6
- (C) 7
- (D) 8

16. A fruit seller has 43 watermelons. He packs 4 water melons into each basket. How many baskets will he need and how many watermelons will be left unpacked?

- (A) Baskets=10; left=5
- (B) Baskets=12; left=6
- (C) Baskets=10; left=3
- (D) Baskets=8; left=8

17. What fraction of the circle is shaded?



- (A) $\frac{2}{6}$
 (B) $\frac{2}{4}$
 (C) $\frac{2}{5}$
 (D) $\frac{2}{3}$

18. An egg seller had some eggs. He sold 240 eggs on Monday. He sold 130 eggs on Tuesday. After that he had 37 eggs left. How many eggs did he have at first?

- (A) 405
 (B) 407
 (C) 403
 (D) 401

19. In the morning, Sruthi looked at the clock and the time shown below is what she saw. If the clock is 1 h 55 min slow what was the actual time?



- (A) 10:20 a.m.
 (B) 10:00 a.m.
 (C) 11:00 a.m.
 (D) 9:50 a.m.

20. Which is the largest even number that can be found with the digits '4', '1', '9' and '2'?

(A) 9421

(B) 2194

(C) 4129

(D) 9412

Developed by: **Mindsprite Solutions**