

Examrace: Downloaded from examrace.com


For solved question bank visit [doorsteptutor.com](https://www.doorsteptutor.com) and for free video lectures visit [Examrace YouTube Channel](#)

IMO (International Mathematics Olympiad) Class 4 Level 1 Past Paper (Previous Year) 2018 Part 2 Download All the Papers for 2021 Exam

Doorsteptutor material for IMO-Level-2 is prepared by world's top subject experts: [fully solved questions with step-by-step explanation](#)- practice your way to success.

Question 6:

Which of the following figures is exactly embedded in the given figure as one of its parts?



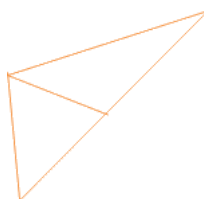
©Examrace. Report @violations @https://tips.fbi.gov/

(a)



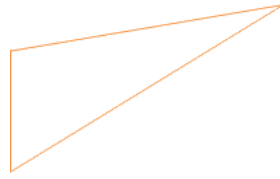
©Examrace. Report @violations @https://tips.fbi.gov/

(b)



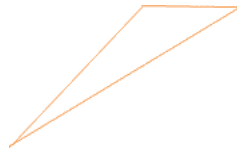
©Examrace. Report @violations @https://tips.fbi.gov/

(c)



©Examrace. Report ©violations @https://tips.fbi.gov/

(d)

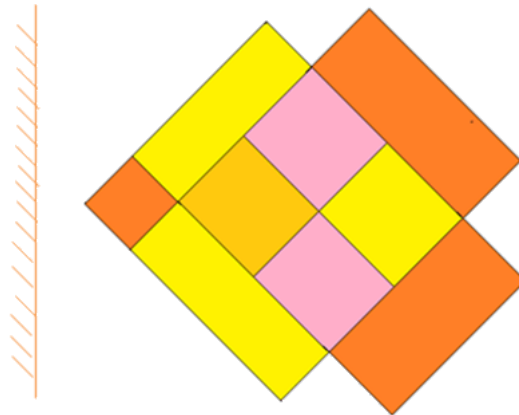


©Examrace. Report ©violations @https://tips.fbi.gov/

Question 7:

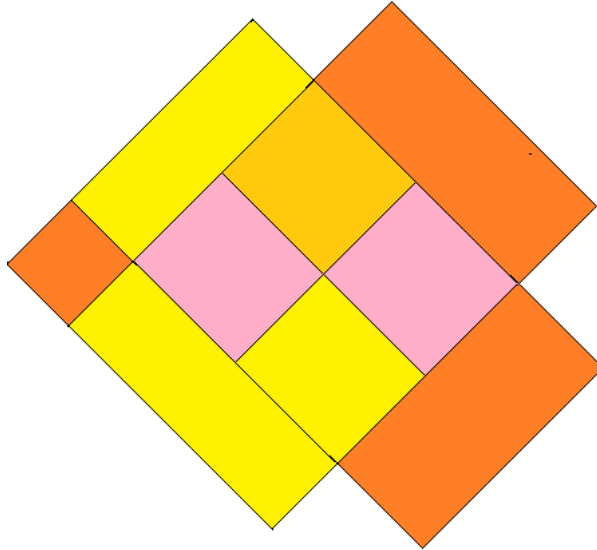
Find the correct mirror image of the given figure.

MIRROR



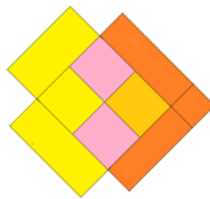
©Examrace. Report ©violations @https://tips.fbi.gov/

(a)



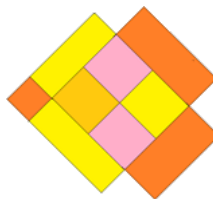
[©Examrace. Report ©violations @https://tips.fbi.gov/](https://tips.fbi.gov/)

(b)




[©Examrace. Report ©violations @https://tips.fbi.gov/](https://tips.fbi.gov/)

(c)



[©Examrace. Report ©violations @https://tips.fbi.gov/](https://tips.fbi.gov/)

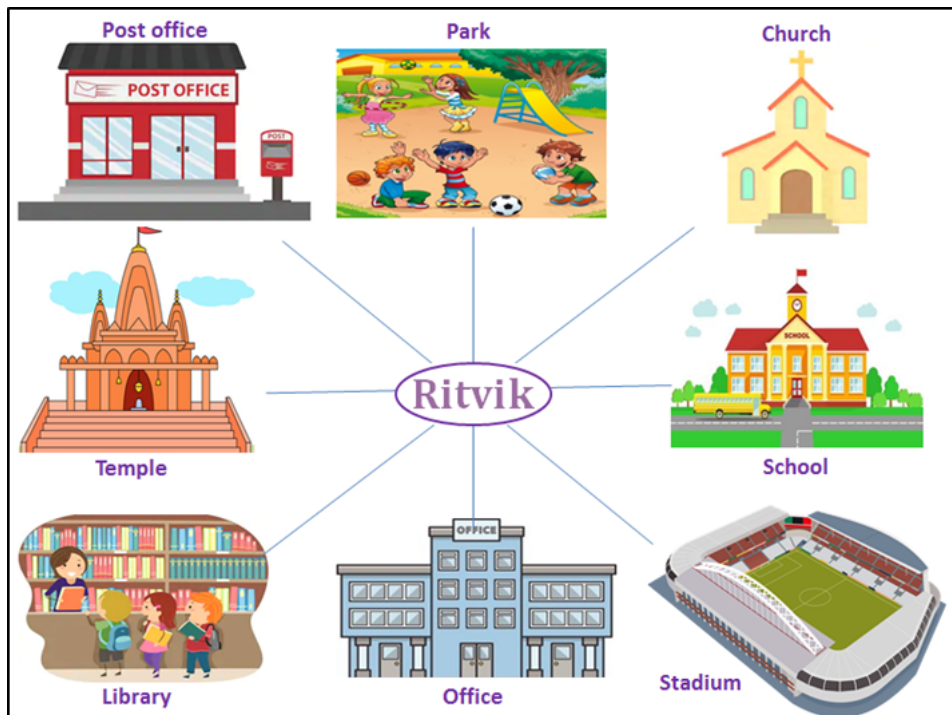
(d)



©Examrace. Report ©violations @https://tips.fbi.gov/

Question 8:

Ritvik is facing the school. If he makes a $\frac{5}{8}$ turn clockwise, then what will he be facing?



©Examrace. Report ©violations @https://tips.fbi.gov/

- (a) Office
- (b) Library
- (c) Temple
- (d) Post office

Question 9:

If the position of boats R and Y are interchanged, then seventh boat to the left of second boat from the end is

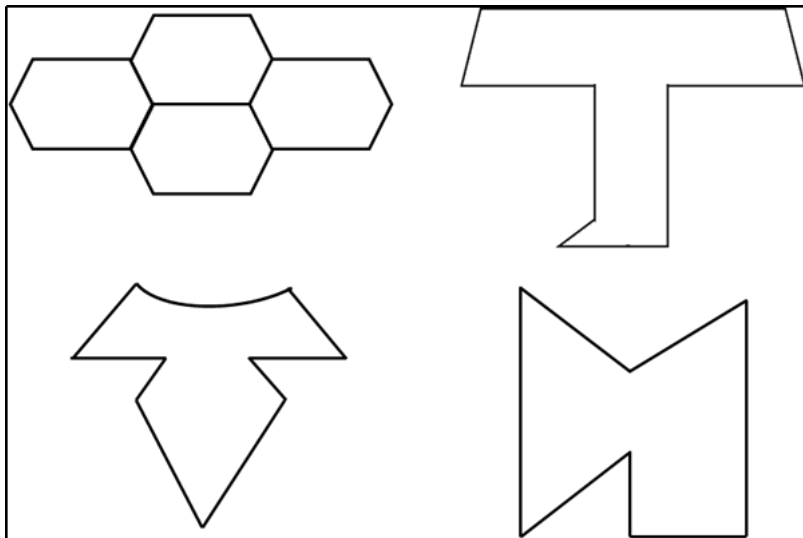


©Examrace. Report @violations @https://tips.fbi.gov/

- (a) Q
- (b) R
- (c) U
- (d) Y

Question 10:

How many of the following figures have Atleast one line of symmetry?



©Examrace. Report @violations @https://tips.fbi.gov/

- (a) 1
- (b) 2
- (c) 3
- (d) 4