

Competitive Exams Chemistry Mock Test 13

Q-1 The energy of first excited state of Li^{2+} will be

- (a) 13.6 eV
- (b) 27.2 eV
- (c) 30.6 eV
- (d) 40.8 eV

Q-2 which of the following phenomena will occur when two atoms of the elements having same spin of electron approach for bonding?

- (a) Orbital overlap will not occur
- (b) Bonding will not occur
- (c) Both (a) and (b) are correct
- (d) None of these is correct

Q-3 The number of octahedral sites per sphere in fcc structure are

- (a) 8
- (b) 4
- (c) 2
- (d) 1

Q-4 Due to Franked defect, the density of ionic solids

- (a) Decreases
- (b) Increases
- (c) Does not change
- (d) Change depends on crystal structure

Q-5 For the given electrolyte A_xB_y , the degree of dissociation ' α ' can be given as

- (a) $\alpha = \frac{i-1}{x+y-1}$
- (b) $i(1-\alpha) + x\alpha + y\alpha$

Visit examrace.com for free study material, doorsteptutor.com for questions with detailed explanations, and "Examrace" YouTube channel for free videos lectures

(c) $\alpha = \frac{1-i}{1-xy}$

Q-6 The efficiency of a heat engine is maximum when

- (a) Temperature of sink > temperature of source
- (b) Temperature of source > temperature of sink
- (c) The difference between temperature of source and sink is very high
- (d) None of these

Q-7 If three faradays of electricity is passed through the solution of $AgNO_3$, $CuSO_4$ and $AuCl_3$, the molar ratio of the captions deposited at the cathodes will be

- (a) 1: 1: 1
- (b) 1: 2 :3
- (c) 3: 2: 1
- (d) 6: 3: 2

Q-8 A gas 'X' at 1 atm is bubbled through a solution containing a mixture of 1 M Y and 1 M Z at $25^\circ C$. If standard reduction potential of $Z > Y > Y X$, then

- (a) Y will oxidize X and not Z
- (b) Y will oxidize Z and not X
- (c) Y will oxidize both X and Z
- (d) Y will reduce both Z and Z

Q-9 The rate constant of a chemical reaction can be increased by

- (a) Decreasing the temperature
- (b) Increasing the temperature
- (c) Increasing concentration of reactants
- (d) Decreasing concentration of reactants

Q-10 Consider the two equations at a particular temperature $2N_2O_5 \rightarrow 4NO_2 + O_2$ $N_2O_5 \rightarrow 2NO_2 + \frac{1}{2} O_2$ If E_1 and E_2 represents the activation energy for the first and second reaction respectively then

- (a) $E_1 > E_2$
- (b) $E_1 < E_2$
- (c) $E_1 = 2E_2$

Visit examrace.com for free study material, doorsteptutor.com for questions with detailed explanations, and "Examrace" YouTube channel for free videos lectures

(d) $E_1 = E_2$

Q-11 Which one of the following is an example of a hydrophilic colloidal sol?

(a) Sulphur

(b) $As_2 S_3$

(c) Gold sol

(d) Starch

Q-12 In $P_4 O_{10}$ the number of oxygen atoms attached to each phosphorus atom is

(a) 2

(b) 3

(c) 4

(d) 5

Q-13 which of the following compound acts both as an oxidizing as well as reducing agent?

(a) SO_2

(b) MnO_2

(c) $Al_2 O_3$

(d) CrO_3

Q-14 Green vitriol is

(a) $CuSO_4$

(b) $CuSO_4 \cdot 7H_2O$

(c) $CuSO_4 \cdot 5H_2O$

(d) $FeSO_4 \cdot 7H_2O$

Q-15 only lanthanide which is radioactive is

(a) Sn

(b) Yb

(c) Pm

(d) Eu

Q-16 When $^{23}_{13}Al$ is bombarded with α particles, a radioactive isotope of phosphorus $^{30}_{15}P$ with the emission of ... is formed

Visit examrace.com for free study material, doorsteptutor.com for questions with detailed explanations, and "Examrace" YouTube channel for free videos lectures

- (a) Neutrons
- (b) Protons
- (c) Positrons
- (d) Electrons

Q-17 A freshly prepared radioactive source of half life period 2 hours, emits radiations of intensity which is 64 times the permissible safe level. The minimum time after which it would be possible to work with this source is

- (a) 6 hours
- (b) 12 hours
- (c) 24 hours
- (d) 48 hours

Q-18 which of the following has the highest par magnetism?

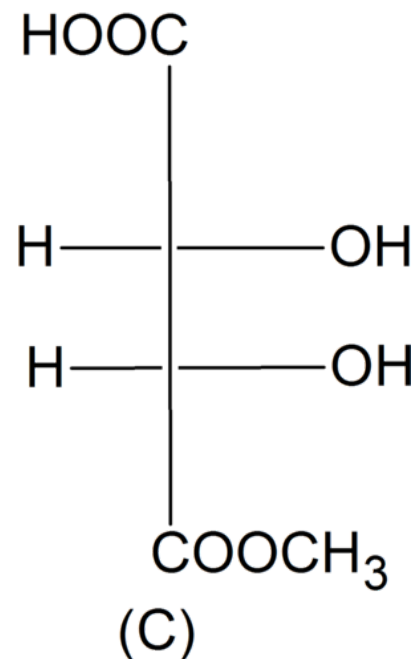
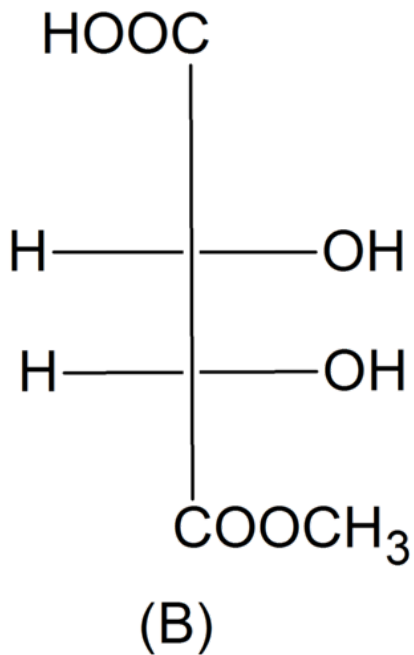
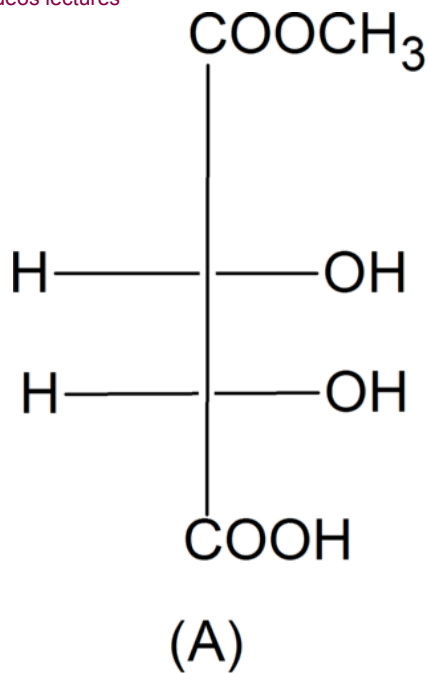
- (a) $[Cr(H_2O)_6]^{3+}$
- (b) $[Fe(H_2O)_6]^{2+}$
- (c) $[Cu(H_2O)_6]^{2+}$
- (d) $[Zn(H_2O)_6]^{2+}$

Q-19 which of the following will form an octahedral complex?

- (a) d^4 (Low spin)
- (b) d_8 (High spin)
- (c) d_6 (Low spin)
- (d) All of these

Q-20 The correct statement about A, B, C is

Visit examrace.com for free study material, doorseptutor.com for questions with detailed explanations, and "Examrace" YouTube channel for free videos lectures



Correct Statement About a, B, C

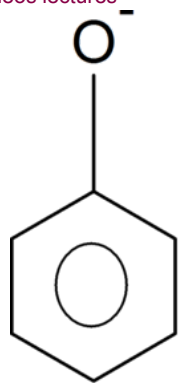
- (a) A and B are identical
- (b) A and B are diastereomers
- (c) A and C are enantiomers
- (d) A and B are enantiomers

Q-21 Phenol and benzoic acid can be distinguished by

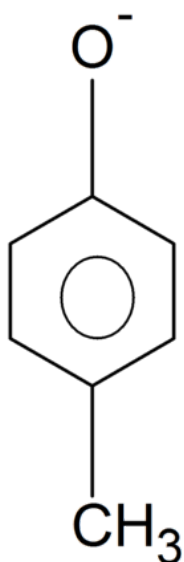
- (a) Aqueous $NaHCO_3$
- (b) Aqueous $NaNO_3$
- (c) Aqueous $NaOH$
- (d) conc. H_2SO_4

Q-22 Find the correct order

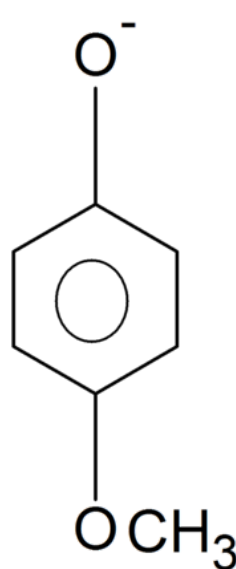
Visit examrace.com for free study material, doorsteptutor.com for questions with detailed explanations, and "Examrace" YouTube channel for free videos lectures



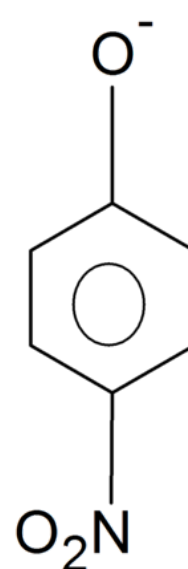
I



II



III



IV

Correct Order of Reactivity

- (a) I > II > III > IV
- (b) IV > I > II > III
- (c) I > II > IV > III
- (d) II > III > IV > I

Q-23 When acetaldehyde is heated with Fehling's solution, it gives a precipitate of

- (a) Cu
- (b) CuO
- (c) $Cu + Cu_2O + CuO$
- (d) Cu_2O

Q-24 The principal organic product formed in the reaction



- (a) $CH_3CH(Br)(CH_2)_8COOH$
- (b) $CH_2 = CH(CH_2)_8COBr$
- (c) $CH_2Br(CH_2)_9COOH$
- (d) $CH_2 = CH(CH_2)_7CHBrCOOH$

Q-25 Secondary nitro alkanes on treatment with nitrous acid form

- (a) Nitrolic acids
- (b) Carboxylic acids

(c) Pseudonitroles

(d) Ketones

Q-26 In HS , I , $R - NH_2$, NH_3 , the order of proton accepting tendency will be

(a) $i^- > NH_3 > R - NH_2 > HS$

(b) $NH_3 > R - NH_2 > HS^- I$

(c) $R - NH_2 > NH_3 > HS^- > I$

(d) $HS^- R - NH_2 > NH_3 > I$

Q-27 In vulcanization of rubber

(a) Sulphur reacts to form new compound

(b) Sulphur cross links are introduced

(c) Sulphur forms a very thin protective layer over rubber

(d) All the statement is correct

Q-28 which of the following does not represent a disaccharide?

(a) Maltose

(b) Sucrose

(c) Lactose

(d) Dextrose

Q-29 which one of the following vitamins contains a metal atom?

(a) Riboflavin

(b) Vitamin B_{12}

(c) Antiseptic

(d) Anti-malarial

Q-30 Veronal, a barbiturate drug is used as

(a) Antihistamine

(b) Sedative

(c) Antiseptic

(d) Anti-malarial

Q-31 Gay Lussa's law of gaseous volume is derived from

Visit examrace.com for free study material, doorsteptutor.com for questions with detailed explanations, and "Examrace" YouTube channel for free videos lectures

- (a) Law of definite properties
- (b) Law of multiple properties
- (c) Law of reciprocal properties
- (d) Experimental observation

Q-32 One liter flask contains air, water vapour and small amount of liquid water at pressure of 200 mm Hg. If this is connected to another one liter evacuated flask, what will be the final pressure of the gas mixture to be $50^{\circ} C$.

(Aqueous tension at $50^{\circ} C = 93 \text{ mm Hg}$)

- (a) 120.56 mm
- (b) 230 mm
- (c) 146.5 mm
- (d) 109.4 mm

Q-33 The correct order of decreasing ionic radius among the following anions would be

- (a) $Se^{2-}, I, Br, F, O^{2-}$
- (b) $F^{-}, Br, O^{2-}, Se^{2-}, I^{-}$
- (c) $I, Se^{2-}, Br, O^{2-}, F$
- (d) $F^{-}, O^{2-}, Br^{-}, Se^{2-}, I^{-}$

Q-34 $I_2 + I^{-} \rightleftharpoons I_3^{-}$ this reaction is set up in aqueous medium. We start with 1 mole of I_2 and 0.5 mole of I^{-} in 1 L flask. After equilibrium, the excess of $AgNO_3$ gave 0.25 mole of yellow ppt. Then the equilibrium constant is

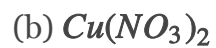
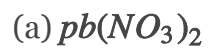
- (a) 1.33
- (b) 2.66
- (c) 2.00
- (d) 3.00

Q-35 at $90^{\circ} C$, pure water has $[H^{+}] = 10^{-6} M$. the value of K_w at $90^{\circ} C$ is

- (a) 10^{-6}
- (b) 10^{-8}
- (c) 10^{-12}
- (d) 10^{-14}

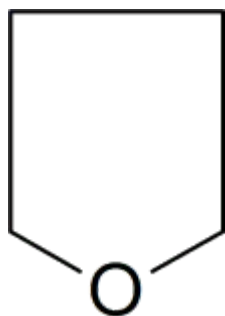
Visit examrace.com for free study material, doorsteptutor.com for questions with detailed explanations, and "Examrace" YouTube channel for free videos lectures

Q-36 Nitrogen dioxide cannot be obtained by heating



Q-37 which of the following is heterocyclic aromatic species?

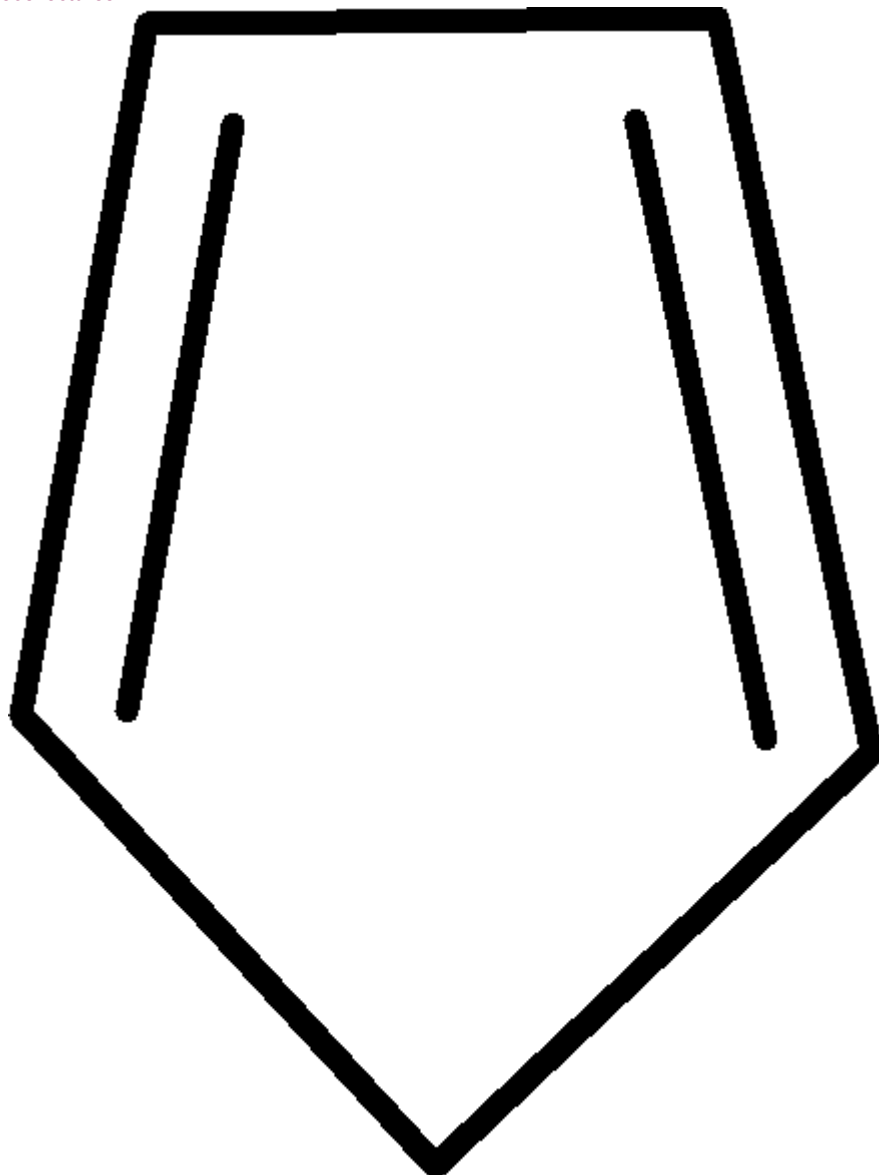
(a)



Heterocyclic Species - Choice A

(b)

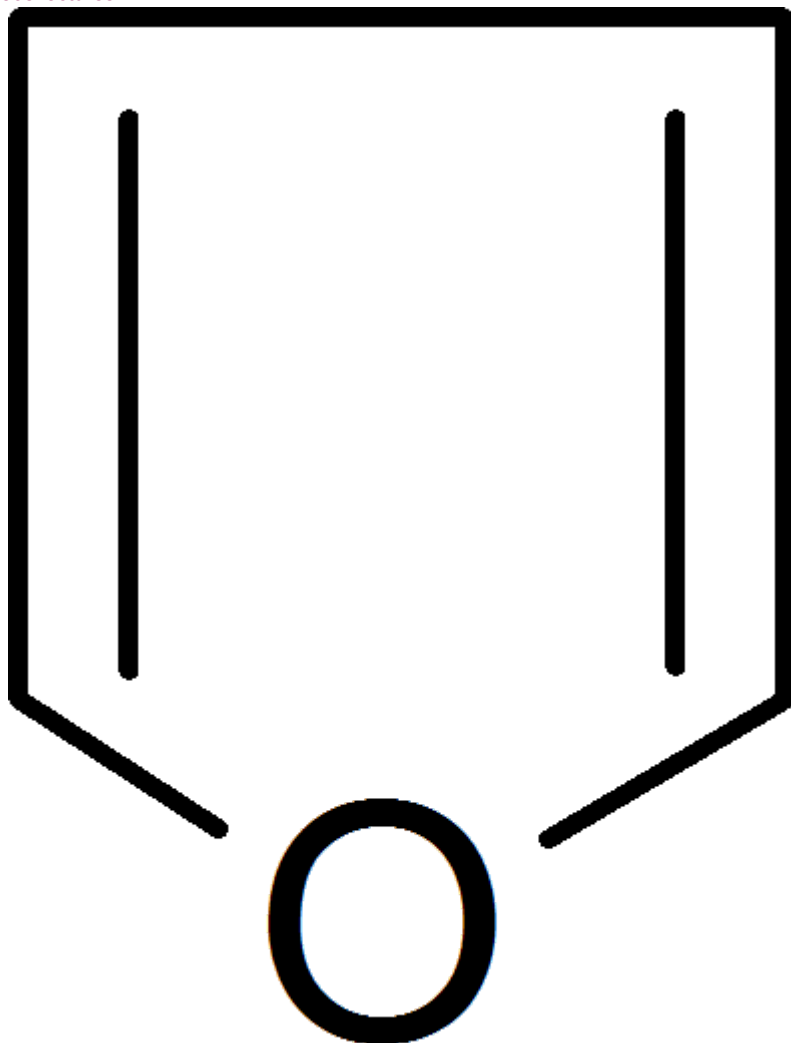
Visit examrace.com for free study material, doorsteptutor.com for questions with detailed explanations, and "Examrace" YouTube channel for free videos lectures



Heterocyclic Species - Choice B

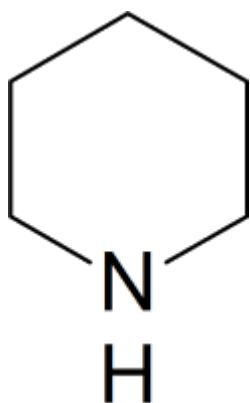
(c)

Visit examrace.com for free study material, doorsteptutor.com for questions with detailed explanations, and "Examrace" YouTube channel for free videos lectures



Heterocyclic Species - Choice C

(d)



Heterocyclic Species - Choice D

Q-38 which of the following halides undergoes nucleophilic substitution most readily?

- (a) $p - H_3CC_6H_4Cl$
- (b) $o - MeOC_6H_4Cl$
- (c) $p - ClC_6H_4Cl$
- (d) $C_6H_5CH(Cl)CH_3$

Visit examrace.com for free study material, doorsteptutor.com for questions with detailed explanations, and "Examrace" YouTube channel for free videos lectures

Q-39 Dumas' method involves the determination of nitrogen content in the organic compound in the form of

- (a) NH_3
- (b) N_2
- (c) $NaCN$
- (d) $(NH_4)_2SO_4$

Q-40 Group V cations are precipitated in form of carbonates by $(NH_4)_2CO_3$. why can we not use Na_2CO_3 instead of $(NH_4)_2CO_3$?

- (a) Because Na_2CO_3 will precipitate $MgCO_3$
- (b) Because Na_2CO_3 is insoluble in water
- (c) Because it is an ionic compound
- (d) None of these